


Write the time two ways. Write the missing numbers.


1



\_\_\_\_\_ : \_\_\_\_\_

20 minutes after \_\_\_\_\_


2



\_\_\_\_\_ : \_\_\_\_\_

\_\_\_\_\_ minutes after 10

3



\_\_\_\_\_ : \_\_\_\_\_

\_\_\_\_\_ minutes after 8


4



\_\_\_\_\_ : \_\_\_\_\_

half past \_\_\_\_\_


5



\_\_\_\_\_ : \_\_\_\_\_

half past \_\_\_\_\_

6



\_\_\_\_\_ : \_\_\_\_\_


\_\_\_\_\_ minutes after 11



Draw a new minute hand on clocks 5 and 6 that shows 10 minutes later.

Write the time two ways. Write the missing numbers.


1



\_\_\_\_\_ : \_\_\_\_\_

\_\_\_\_\_ minutes after 7


2



\_\_\_\_\_ : \_\_\_\_\_

\_\_\_\_\_ minutes after \_\_\_\_\_


3



\_\_\_\_\_ : \_\_\_\_\_

13 minutes before \_\_\_\_\_

4




\_\_\_\_\_ : \_\_\_\_\_

\_\_\_\_\_ minutes before \_\_\_\_\_

10 minutes later \_\_\_\_\_ : \_\_\_\_\_

5




\_\_\_\_\_ : \_\_\_\_\_

\_\_\_\_\_ minutes after \_\_\_\_\_

10 minutes later \_\_\_\_\_ : \_\_\_\_\_

6



\_\_\_\_\_ : \_\_\_\_\_

\_\_\_\_\_ minutes before \_\_\_\_\_


10 minutes later \_\_\_\_\_ : \_\_\_\_\_



Tell where the minute hand is pointing on clocks 5 and 6.

Write the time. Then write the time 10 minutes later.

1




\_\_\_\_\_:

\_\_\_\_\_:

10 minutes later

2




\_\_\_\_\_:

\_\_\_\_\_:

10 minutes later

3




\_\_\_\_\_:

\_\_\_\_\_:

10 minutes later

4



\_\_\_\_\_:

\_\_\_\_\_:

10 minutes later

5



\_\_\_\_\_:

\_\_\_\_\_:

10 minutes later

6




\_\_\_\_\_:

\_\_\_\_\_:

10 minutes later

7




\_\_\_\_\_:

\_\_\_\_\_:

10 minutes later

8



\_\_\_\_\_:

\_\_\_\_\_:

10 minutes later




Tell where the clock hands point when it is 10 minutes later.

Name \_\_\_\_\_

Write how many minutes have passed.

1




Start at 4:00 A.M.

End at 4:22 A.M.

\_\_\_\_\_ minutes have passed.

2




Start at 8:30 A.M.

End at 8:45 A.M.

\_\_\_\_\_ minutes have passed.

3




Start at 10:40 P.M.

End at 10:56 P.M.

\_\_\_\_\_ minutes have passed.

4




Start at 2:58 A.M.

End at 3:07 A.M.

\_\_\_\_\_ minutes have passed.

5




Start at 8:10 A.M.

End at 8:42 A.M.

\_\_\_\_\_ minutes have passed.

6

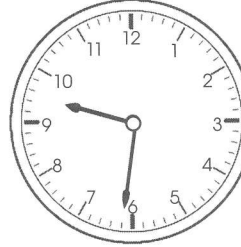


Start at 11:50 A.M.

End at 12:02 P.M.

\_\_\_\_\_ minutes have passed.

7




Start at 9:31 P.M.

End at 9:49 P.M.

\_\_\_\_\_ minutes have passed.

8



Start at 1:07 A.M.

End at 2:00 A.M.

\_\_\_\_\_ minutes have passed.